



Measure the width and height of each block in inches and in centimeters.

Ex)




Ex(w-in). 3

Ex(h-in). 0 1/2

Ex(w-cm). 7.6

Ex(h-cm). 1.3

1)



1(w-in). _____

1(h-in). _____

1(w-cm). _____

1(h-cm). _____

2)




2(w-in). _____

2(h-in). _____

2(w-cm). _____

2(h-cm). _____

3)




3(w-in). _____

3(h-in). _____

3(w-cm). _____

3(h-cm). _____

4)



4(w-in). _____

4(h-in). _____



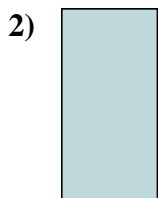
4(w-cm). _____

4(h-cm). _____

Answers



Measure the width and height of each block in inches and in centimeters.



Answers

Ex(w-in). 3

Ex(h-in). 0 1/2

Ex(w-cm). 7.6

Ex(h-cm). 1.3

1(w-in). 1 1/2

1(h-in). 1

1(w-cm). 3.8

1(h-cm). 2.5

2(w-in). 0 1/2

2(h-in). 1

2(w-cm). 1.3

2(h-cm). 2.5

3(w-in). 5 1/2

3(h-in). 1

3(w-cm). 14

3(h-cm). 2.5

4(w-in). 1

4(h-in). 1 1/2

4(w-cm). 2.5

4(h-cm). 3.8